


Exam 8


Name: _____

Write the following scales using accidentals (no key signatures), ascending only:


1. B Whole Tone



2. Eb Octatonic (start with whole step)



3. A Mixolydian




4. Notate the 8 mediant triads in relation to the starting triad, placing each in its correct category.


Bb Major Diatonic Chromatic Doubly-chromatic



5. Fill in the blank: $T_4 I [4, 5, 6, 10] = [_ , _ , _ , _]$.

6. Find the prime form of:  Answer = ()



7. Notate R_{10} : 

8. Notate I_5 : 