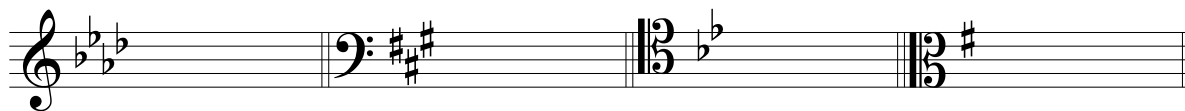


# Key Signatures

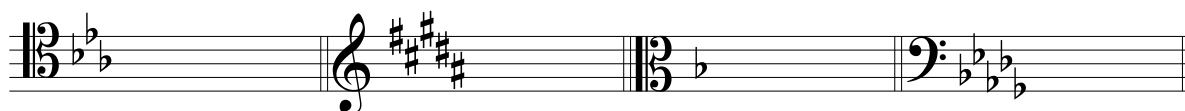
Name: \_\_\_\_\_

I. Identify the following key signatures, giving both major and minor versions.



Major Key Signature: \_\_\_\_\_


Minor Key Signature: \_\_\_\_\_



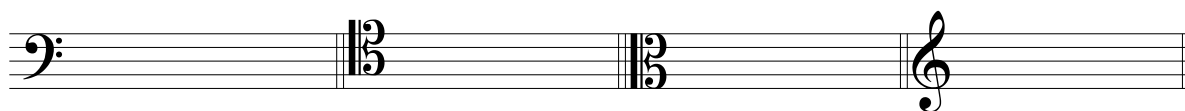
Major Key Signature: \_\_\_\_\_

Minor Key Signature: \_\_\_\_\_

II. Write the following key signatures, using correct order and octave placement of accidentals.



Key:       B Minor             Eb Major             G Major             D Minor      



Key:       Db Major             F Minor             F# Major             A Minor      

